




1.




2.




3.





4.





5.





6.





7.




8.



9.






















10.



Övningens idé: Att träna förståelse av kurvbild.
 Detta behövs: Arbetsbad och pennor
 Förberedelser: Kopiera upp arbetsbladen

Genomförande:

1. Dela ut arbetsbladen till eleverna
2. Låt eleverna fylla i den tomma kolumnen vid kartbilden med siffran som står vid siluetten

	1.	<input type="checkbox"/>	
	2.	<input type="checkbox"/>	
	3.	<input type="checkbox"/>	
	4.	<input type="checkbox"/>	
	5.	<input type="checkbox"/>	
	6.	<input type="checkbox"/>	
	7.	<input type="checkbox"/>	
	8.	<input type="checkbox"/>	
	9.	<input type="checkbox"/>	
	10.	<input type="checkbox"/>	